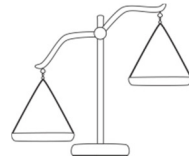


100 COINS

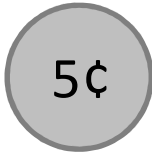
Which will weigh more?



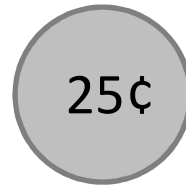
MY PREDICTION

100 nickels

100 quarters



OR



MY RESULTS

